



AVERIGUA QUÉ NUMERO REPRESENTA CADA ANIMALITO


Actividad conteo





María Olivares para Orientación Andújar


12 - 13 - 14 -  - 16 - 17 - 18 - 19 - 20

40 - 41 - 42 - 43 - 44 - 45 - 46 - 47 - 

9 - 10 -  - 12 - 13 - 14 - 15 - 16 - 17

 =

 =

 =

34 - 35 - 36 - 37 - 38 - 39 -



- 40 - 41

61 - 62 - 63 - 64 - 65 -



- 67 - 68 - 69


23 - 24 - 25 - 26 - 27 - 28 -




- 30 - 31




=



=



=




55 - 56 - 57 - 58 - 59 - 60 - 61 -  - 63

1 - 2 - 3 -  - 5 - 6 - 7 - 8 - 9 - 10 - 11

90 - 91 -  - 93 - 94 - 95 - 96 - 97 - 98



=



=



=

16 - 17 - 18 - 19 -  - 21 - 22 - 23 - 24

46 - 47 - 48 - 49 - 50 - 51 - 52 -  - 54


71 - 72 - 73 - 74 - 75 - 76 -  - 78 - 79



=




=




=


53 - 54 - 55 - 56 -  - 58 - 59 - 60 - 61

85 - 86 - 87 - 88 -  - 90 - 91 - 92 - 93


17 -  - 19 - 20 - 21 - 22 - 23 - 24 - 25



=



=



=