



PREFEITURA MUNICIPAL DE PONTE NOVA
SECRETARIA DE EDUCAÇÃO
ESTADO DE MINAS GERAIS

TEMA: FOLCLORE



ATIVIDADE DE PORTUGUÊS - 1º ANO DO ENSINO FUNDAMENTAL

1- ESCREVA O SEU NOME NO ESPAÇO ABAIXO:

2- LIGUE OS PERSONAGENS FOLCLÓRICOS AOS SEUS NOMES:



CURUPIRA



SEREIA



SACI



LOBISOMEM




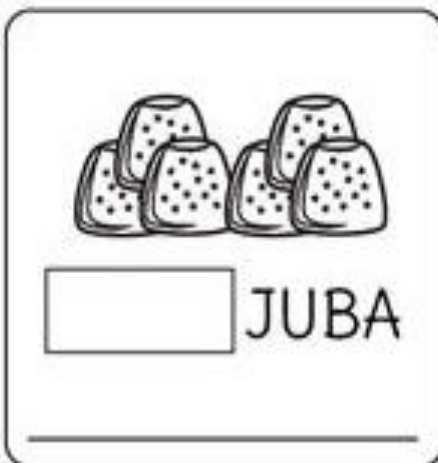

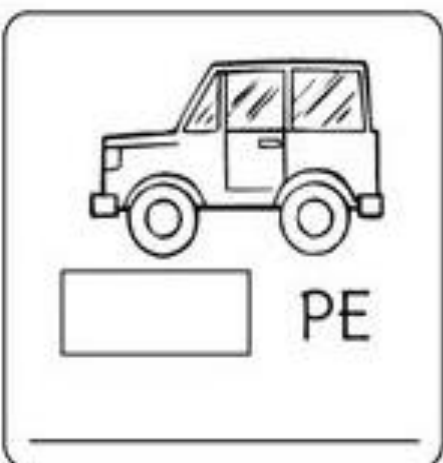

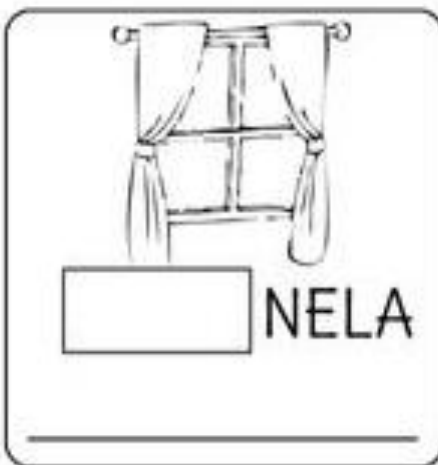
MULA-SEM-CABEÇA



BOITATÁ

3- COMPLETE AS PALAVRAS ABAIXO COM AS SILÁBAS:

JA – JE – JI – JO – JU - JÃO




✓ AGORA , EM SEU CADERNO ESCREVA E SEPARE AS SILÁBAS DAS PALAVRAS QUE VOCÊ COMPLETOU.

MATEMÁTICA- 1ºANO DO ENSINO FUNDAMENTAL

1- VEJA ALGUNS DOS PERSONAGENS FOLCLÓRICOS:

CONTE A QUAANTIDADE DE CADA UM E ANOTE NO QUADRINHO CORRESPONDENTE:



2- RESOLVA AS ADIÇÕES ABAIXO:

$\begin{array}{r} 9 \\ + 2 \\ \hline \end{array}$	$\begin{array}{r} 6 \\ + 3 \\ \hline \end{array}$	$\begin{array}{r} 8 \\ + 4 \\ \hline \end{array}$	$\begin{array}{r} 5 \\ + 5 \\ \hline \end{array}$	$\begin{array}{r} 7 \\ + 6 \\ \hline \end{array}$
$\begin{array}{r} 4 \\ + 7 \\ \hline \end{array}$	$\begin{array}{r} 2 \\ + 8 \\ \hline \end{array}$	$\begin{array}{r} 3 \\ + 9 \\ \hline \end{array}$	$\begin{array}{r} 1 \\ + 8 \\ \hline \end{array}$	$\begin{array}{r} 9 \\ + 8 \\ \hline \end{array}$
$\begin{array}{r} 8 \\ + 8 \\ \hline \end{array}$	$\begin{array}{r} 7 \\ + 8 \\ \hline \end{array}$	$\begin{array}{r} 6 \\ + 8 \\ \hline \end{array}$	$\begin{array}{r} 5 \\ + 6 \\ \hline \end{array}$	$\begin{array}{r} 4 \\ + 5 \\ \hline \end{array}$
$\begin{array}{r} 3 \\ + 4 \\ \hline \end{array}$	$\begin{array}{r} 2 \\ + 3 \\ \hline \end{array}$	$\begin{array}{r} 1 \\ + 2 \\ \hline \end{array}$	$\begin{array}{r} 7 \\ + 5 \\ \hline \end{array}$	$\begin{array}{r} 7 \\ + 4 \\ \hline \end{array}$
$\begin{array}{r} 7 \\ + 3 \\ \hline \end{array}$	$\begin{array}{r} 7 \\ + 2 \\ \hline \end{array}$	$\begin{array}{r} 6 \\ + 5 \\ \hline \end{array}$	$\begin{array}{r} 6 \\ + 4 \\ \hline \end{array}$	$\begin{array}{r} 6 \\ + 3 \\ \hline \end{array}$
$\begin{array}{r} 6 \\ + 2 \\ \hline \end{array}$	$\begin{array}{r} 5 \\ + 4 \\ \hline \end{array}$	$\begin{array}{r} 5 \\ + 3 \\ \hline \end{array}$	$\begin{array}{r} 4 \\ + 3 \\ \hline \end{array}$	$\begin{array}{r} 4 \\ + 2 \\ \hline \end{array}$

