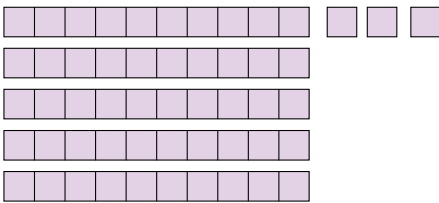
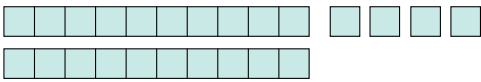
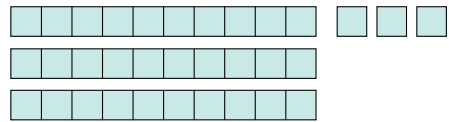


1. פתרו בעזרת  .

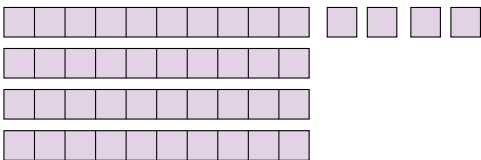
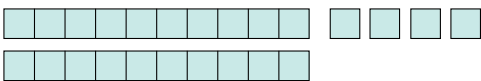
א|  $24 + 53 = \underline{\quad}$



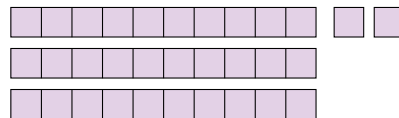
ב|  $33 + 15 = \underline{\quad}$



ג|  $24 + 44 = \underline{\quad}$



ד|  $5 + 32 = \underline{\quad}$



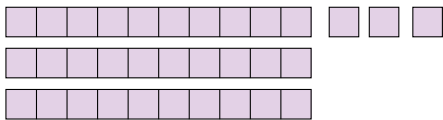
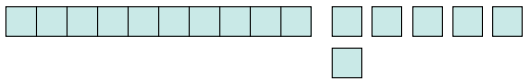
◀ המשך



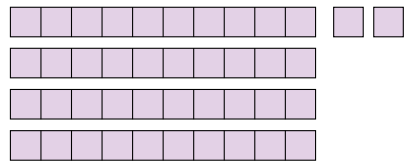
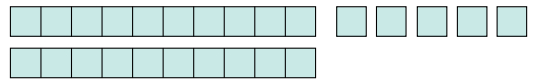


2. הַשְּׁלִימוּ תַרְגִּילִים מֵתְּאִימִים וּפְתְרוּ:

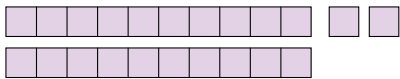
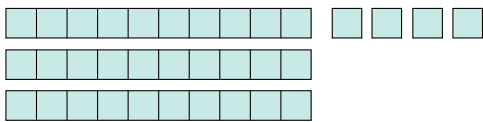
א | \_\_\_\_\_ + \_\_\_\_\_ = \_\_\_\_\_




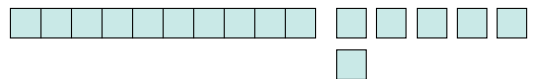
ב | \_\_\_\_\_ + \_\_\_\_\_ = \_\_\_\_\_



ג | \_\_\_\_\_ + \_\_\_\_\_ = \_\_\_\_\_



ד | \_\_\_\_\_ + \_\_\_\_\_ = \_\_\_\_\_

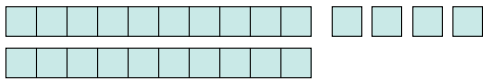


◀ הַמְּשָׁךְ

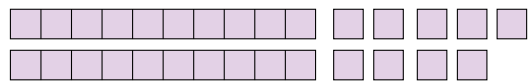
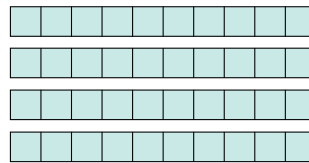





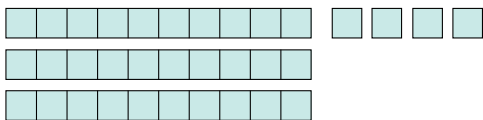
ה |     +     =     \_\_\_\_\_




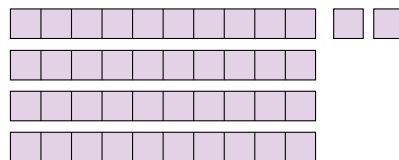
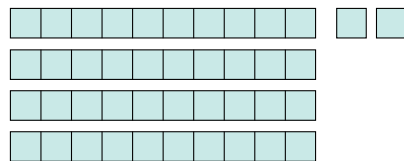
ו |     +     =     \_\_\_\_\_



ז |     +     =     \_\_\_\_\_



ח |     +     =     \_\_\_\_\_



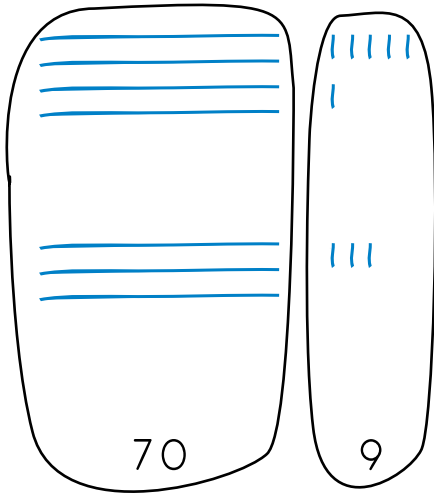
◀ **הַמְשָׁר**



3. פתרו בעזרת "ציור בקצור".

**דגמה**

א |  $46 + 33 = 79$



ב |  $46 + 13 = \underline{\hspace{2cm}}$



ג |  $38 + 11 = \underline{\hspace{2cm}}$

ד |  $6 + 31 = \underline{\hspace{2cm}}$



◀ **המשך**



$ה | 10 \pm 47 = \underline{\hspace{2cm}}$

$ו | 92 \pm 7 = \underline{\hspace{2cm}}$

$ז | 84 \pm 12 = \underline{\hspace{2cm}}$

$ח | 40 \pm 48 = \underline{\hspace{2cm}}$

