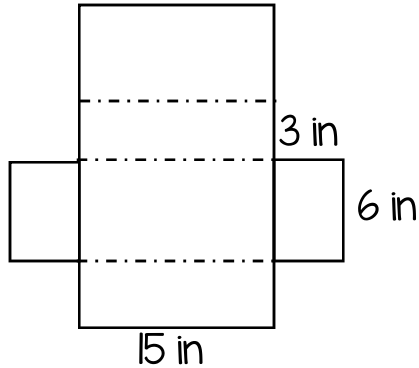


# 6<sup>th</sup> Grade State Test Prep

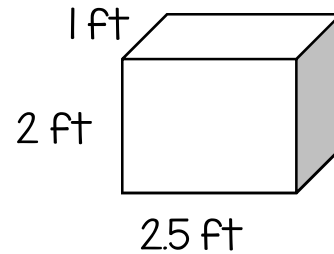
## Questions: Calculator

Name \_\_\_\_\_

49) Find the surface area of the following net.

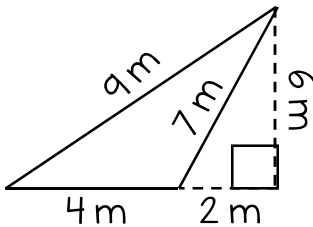


50) A container is shown.

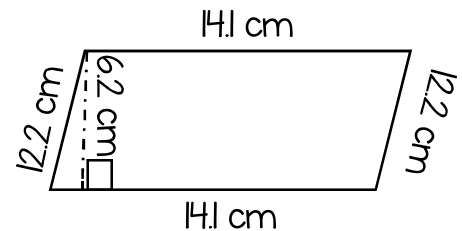


What is the volume, in cubic feet, of the container?

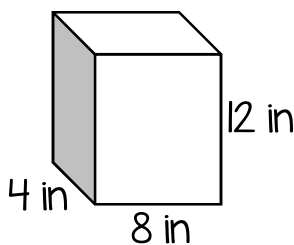
51) Find the area and perimeter of the figure below.



52) Find the area and perimeter of the figure below.



53) How many square inches of material are needed to make the box below?



54) Find the area of the figure below.

